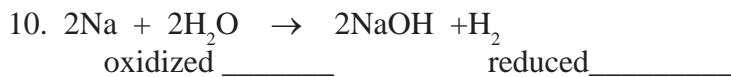
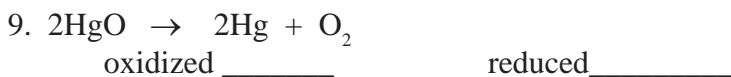
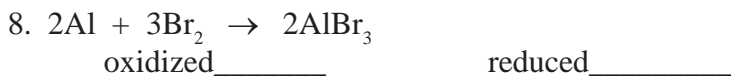
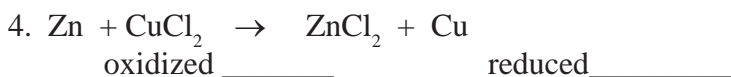
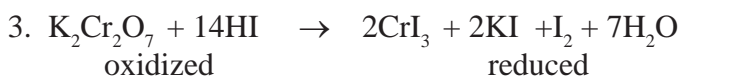
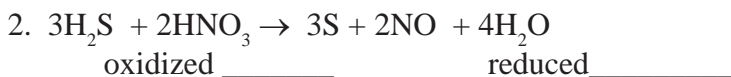
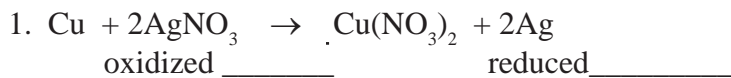


Oxidation /Reduction Problems

Directions

For the following reactions, identify which substance was oxidized and which substance was reduced. Use resource C:9a.



Answer Key

1.Cu - ox, Ag - red, 2.S - ox, N - red, 3.I - ox, Cr - red, 4.Zn - ox, Cu - red, 5.C - ox, Cl - red, 6.H - ox, Cl - red, 7.S - ox, O - red, 8.Al - ox, Br - red, 9.O - ox, Hg - red, 10.Na - ox, H - red